

ESCOLA: \_\_\_\_\_


NOME: \_\_\_\_\_

PROFESSOR: \_\_\_\_\_ DATA: \_\_\_/\_\_\_/\_\_\_




## SUBTRAÇÃO


1 - Faça como o modelo e resolva as operações.




$$5-2=3$$




$$7-5=$$




$$10-7=$$




$$10-8=$$




$$8-5=$$




$$10-3=$$




$$10-5=$$




$$4-2=$$




$$7-4=$$



$$11-8=$$



$$9-5=$$



$$15-2=$$